

1. What kind of angle (acute , obtuse , right) is made by the hands of these clocks. Also write the time.



Angle
Time



Angle
Time

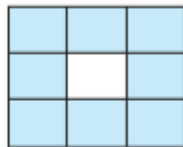


Angle
Time

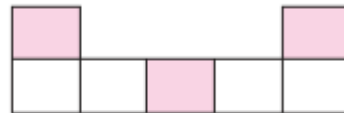
2. How much parts of the following pictures are coloured, express it by fraction :



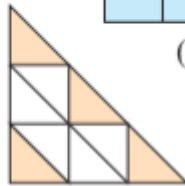
(a)



(b)



(c)

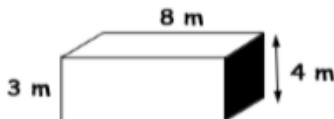


(d)

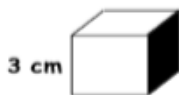


(e)

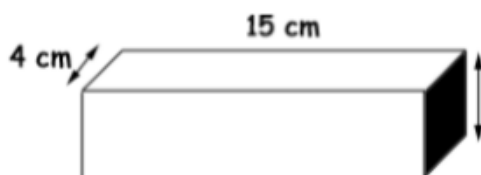
3. Work out the volume of each shape below being careful to use the correct units:



Volume = _____ cm cubes



Volume = _____ cm cubes



Volume = _____ cm cubes

4. Express in centimetre :

- (a) 97 metre 65 centimetre (b) 7 kilometre 473 metre 82 centimetre
(c) 28 kilometre 693 metre 54 centimetre

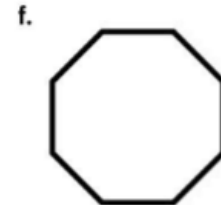

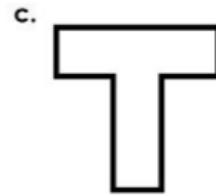
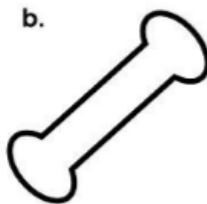
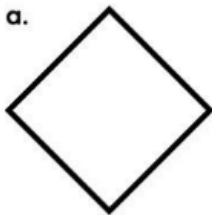
5. Express in metre :

- (a) 971 kilometre (b) 59 kilometre 267 metre

6. Express in kilometre and metre :

- (a) 987654 metre (b) 970635 metre

7. Draw lines of symmetry on the shapes below. Some shapes may have more than one line of symmetry



Активация Win
Чтобы активировать
раздел "Параметры"

8. Add :

(a)	7304	(b)	5497	(c)	2417
	3417		3280		8150
	4098		6003		3704
	879		2807		5863
	<hr/>		<hr/>		<hr/>
					4279

9. Subtract :

(a)	9415	(b)	8542	(c)	83604
	726		3704		7809
	<hr/>		<hr/>		<hr/>

10. Multiply :

(a) 3 4 7 by 6 2

(b) 2 3 8 by 2 0 4

(c) 9 0 5 by 3 2 5

(d) 4 2 0 by 1 6 0

(e) 3 9 9 by 1 3 0

(f) 6 5 2 9 by 1 5

11. II Divide and find the quotient

(a) $20 \div 10 =$

(f) $434 \div 2 =$

(b) $70 \div 10 =$

(g) $999 \div 9 =$

(c) $760 \div 2 =$

(h) $420 \div 4 =$

(d) $540 \div 40 =$

(i) $280 \div 7 =$

(d) $539 \div 3 =$

(j) $624 \div 4 =$

АКТИЕ
Чтобы
раздел

12. Fill in the blank spaces by putting the symbol $>$ or $<$:

(a) 6708 7981

(b) 8012 7992

(c) 96430 96700

(d) 68320 64322

(e) 74325 74305

13. Write down the following numbers by arranging from smaller to greater :

(a) 5631, 4280, 6023, 8192, 5000

(b) 83650, 72600, 84001, 91321, 69698

(c) 90078, 84006, 80375, 95253, 99999

14. Write down the following numbers by arranging from greater to smaller

(a) 7832, 4390, 8023, 9192, 600

(b) 73750, 82700, 75001, 81234, 96967

(c) 90087, 85005, 80357, 96435, 88888

Express 12 weeks 7 days in hours.

Express 18 days 15 hours in minutes.

Express 1 day 1 hour 16 minutes in seconds.

Express 7 weeks 2 days 13 hours in minutes.